

ITBP PUBLIC SCHOOL, DWARKA
HOLIDAY HOMEWORK WORKSHEETS
SUBJECT: EVS

CHAPTER: 1 GOING TO SCHOOL

Q1.Fill in the blanks:

- I. Ahelps a trolley to move across the rope.
- II. Deserts are covered with
- III. One may slip and fall onsnow.
- IV. does not passes through very thick forests.
- V. Some bridges may also have
- VI.helps us to cross a river.

Q2. Guess name of the place.

- I. Rains heavily.....
- II. Camel carts are used.....
- III. Paths are rocky and uneven.....
- IV. Small boats are used.....
- V. Our feet sink into it.....

Q3.Given below are the type of bridges. Rearrange the letters to write the correct words.

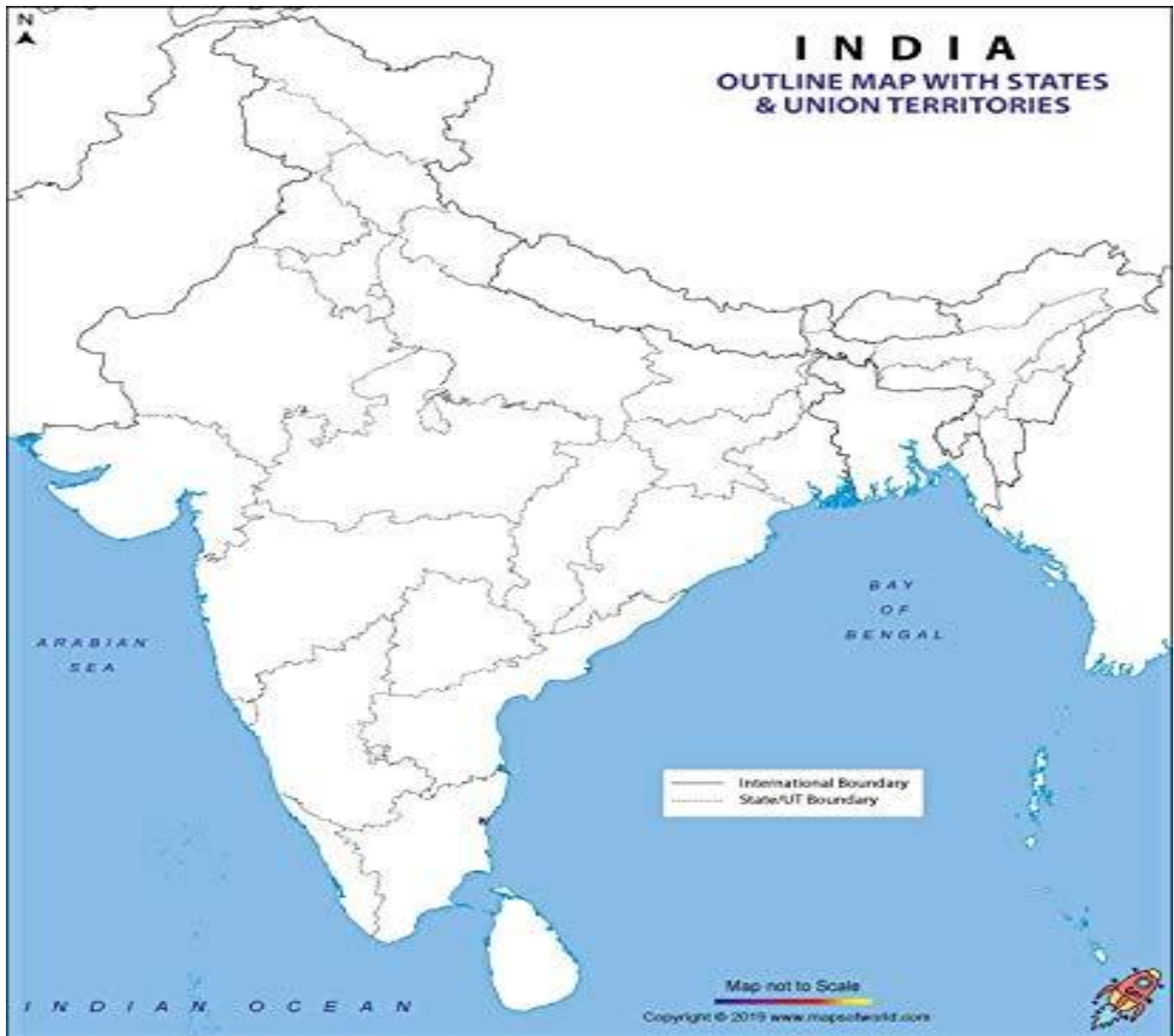
- I. EENCTM: bridge
- II. EPRO :bridge
- III. OBOBMA:bridge.

Q4.Identify the means of transport given below:



Q5. Mark the states in an India political map by using the clues given:

- I. The state in which children walk through jungles
- II. The state in which children walk through rocky paths
- III. The state in which trolley is used by children to reach the school
- IV. The state in which children use jugad to reach the school
- V. The state in which bamboo bridges are used
- VI. The state in which vallam is used by children to reach the school
- VII. The state in which camel – carts are used
- VIII. The state in which we are living.



CHAPTER : 2 EAR TO EAR

Q1. Select the best option.

(i) Which of the following animals has tiny holes on both sides of the head to hear?

(a) Giraffe (b) Crow (c) Tiger (d) Donkey

(ii) The has ears like fans.

(a) elephant (b) monkey (c) whale (d) hen

(iii) The donkey has ears

(a) which cannot be seen (b) on the top of its head

(c) on the sides of its head (d) Both (a) and (b)

(iv) The patterns by which animals may be recognized are due to

(a) colour of their skin (b) hair on their skin

(c) feel of their skin (d) Both (a) and (c)

(v) Now where do we see dinosaurs?

(a) Only in forests (b) Only in the zoo

(c) In firms and pictures (d) None of these

Q2. Answer the questions given below by choosing the names of animals from the box

Cow	Dog	Crocodile	Hen	Sparrow	
Bear	Frog	Lizard		Buffalo	Cat
	Snake				

I. Have ears that can be seen _____, _____

II. Have ears that cannot be seen _____, _____

III. Have hair on skin _____, _____

IV. Do not have hair on skin _____, _____

V. Give birth to young ones _____, _____

VI. Lay eggs _____, _____

VII. An animal with ears on the top of its head - _____

VIII. An animal with ears on both sides of its head - _____

IX. An animal with ears like fan - _____

X. An animal with sharp and pointed ears - _____

Q3.State whether the following statements are True or False.

- I. Tiny holes on lizard's head are its ears. _____
- II. Animals whose ears we can see, have hair on their body. _____
- III. Dinosaurs are endangered animals. _____
- IV. Tiger is the National animal of India. _____
- V. Buffaloes and cows have hair on their bodies. _____
- VI. Sheep do not have hair on their bodies. _____
- VII. Squirrel lays eggs. _____
- VIII. We can see the ears of a crocodile. _____
- IX. All animals have ears. _____

Q4. Differentiate the animals, which have ears that can be seen and which have ears that cannot be seen?

Duck, Elephant, Cat, Dog, Cow, Lizard, Crow, Sparrow, Snake, Wasp

Whose ears can be seen	Whose ears cannot be seen

Q5. The letters of the word given below are jumbled. Figure out what the word is and write it on the blank provided.

- I. RCOOCIDEL _____
- II. ILARDZ _____
- III. OWC _____
- IV. ROWR _____
- V. IRDB _____
- VI. PASORWRW _____

Q6. Answer in one word or one sentence.

- (i) Name two animals which give birth to babies?

- (ii) Name any two animals which have ears on the sides of their head.

- (iii) How does a snake hear?

- (iv) Why do animals have different patterns on their bodies?

CHAPTER: 3 A DAY WITH NANDU

Q1. Write True or False:

- I. Like elephants other animals also live together in groups _____
- II. When the elephant herd reached the jungle, the members of the herd started spreading out _____
- III. Elephants sleep for only 2 to 4 hours in a day _____
- IV. The male elephant has to leave the herd when he is 2 years old _____
- V. Baby elephants can weigh as much as 250kg _____

Q2. Fill in the blanks with the words given in help box:-


mud and water,	big ears,	two to four,	cool,	flap,
leaves and twigs				

- a) Elephants sleep for _____ hours in a day.
- b) Elephants love to play with _____.
- c) The mud keeps their skin _____.
- d) Their _____ work like fans.
- e) Elephants _____ their ears to keep themselves cool.
- f) Elephants eat _____.

Q3. Who is the leader of elephant herd? (Choose your answer)

- a) The strongest male elephant
- b) The oldest male elephant
- c) The oldest female elephant
- d) The youngest female elephant

Q4. Observe the picture carefully and answer the questions given below:




- I. The animal which is riding.....
- II. The animal which gives the ride.....
- III. Why is one animal sitting on the other animal?.....
- IV. How do the animals like snakes, bears, monkeys and horses are ill-treated by human

beings.....

Q5. Colour the picture given below and write few sentences on it using the key words given:

Ears, Sound, Food, Nature, Sound, Size



Q6. Match the animal groups to their herd names: Identify the animals on the basis of their sounds:

(A)	(B)	Sounds	Animals
Camels	Flight	Buzz	_____
Bees	Team	Chirp	_____
Pigeons	Flock	Squeak	_____
Bats	Shoal	Bleat	_____
Ducks	Pack	Hoot	_____
Cattle	Swarm	Chatter	_____
Fish	Caravan	Bray	_____
Dogs	Colony	Quack	_____

CHAPTER: 4 THE STORY OF AMRITA

Q1. Fill in the blanks:

- I. Khejadli village is near _____ in Rajasthan.
- II. People living in Khejadli village are called _____.
- III. _____ is the capital city of Rajasthan.
- IV. We cannot survive without _____.
- V. Khejadli village got its name from the _____ trees that grew there.
- VI. Khejadi's bark is used to making _____.
- VII. _____ gave up their life for trees.
- VIII. Khejadi's wood is such that it will not be affected by _____.

Q2. Choose the correct option:

I. Where is Khejadi Village?

- A. Gujarat
- B. Rajasthan
- C. Goa

II. Who were the friends of Amrita?

- A. Trees
- B. Wild Animals
- C. Strangers

III. Who said ' Give your strength to me'?

- A. Rajat
- B. Raman
- C. Amrita

IV. The wood was needed for building the _____ palace.

- A. King's
- B. Queen's
- C. None of these

V. The Khejadi tree is found mainly in _____ areas.

- A. Plain
- B. Desert
- C. Mountain

VI. _____ is the biggest state in India area wise?

- A. Delhi
- B. Haryana
- C. Rajasthan

Q3. Draw your favourite tree and answer the following questions:

Name:

Where have you seen it?

How does it look?

Does it have flowers or fruits?


What does its leaf look like?

Why do you like this tree?



Q4. Make a collage of following pictures of Rajasthan:

Traditional dress, musical instruments, folk dance, Rajasthan food, plants and animals of desert, houses in desert, means of transport.



TOPIC- COMPUTER HARDWARE

- 1) Physical components of computer which we can touch _____
- 2) A light-sensitive device that converts the printed text, drawing, or other images into digital form is called _____.
- 3) For comparison and calculations, the computer uses _____.
- 4) Which memory stores data permanently? _____
- 5) Recently deleted files are stored in _____
- 6) Write the full form of
ROM - _____
RAM - _____
DVD - _____
CD - _____
- 7) A _____ is a portable storage device
- 8) **bit is short for** _____
- 9) Computer memory is measured in terms of _____.
- 10) Raw facts that have been collected but not organized are known as _____.
- 11) 1 Nibble = _____ bits
- 12) Process data is called _____
- 13) A combination of 8 bits makes a _____.
- 14) Which part is the brain of the computer? _____
- 15) Output obtained on paper using a printer is called _____
- 16) Differentiate input and output device?

- 17) What is a storage device?

- 18) Name one Pointing device. _____